

10 times table

Name: _____

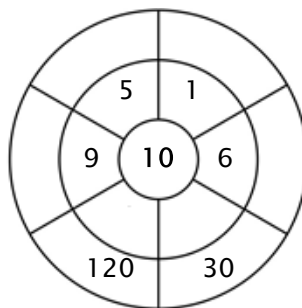
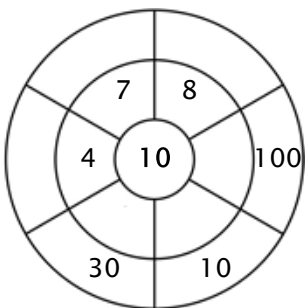
Exercise 1:

Color in all of the boxes that are the solutions of this time table.

60	5	30	36	84
22	95	72	22	100
80	50	50	10	40
40	90	67	20	10
60	142	120	20	33

Exercise 2:

Complete the circle by multiplying the number in the center by the middle ring to get the outer numbers.



Exercise 3:

Fill in the correct product.

a) $10 \times 10 = \underline{\quad}$

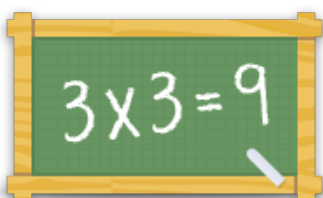
b) $12 \times 10 = \underline{\quad}$

c) $11 \times 10 = \underline{\quad}$

d) $8 \times 10 = \underline{\quad}$

e) $2 \times 10 = \underline{\quad}$

f) $5 \times 10 = \underline{\quad}$



For more worksheets, games and exercises:
www.timestables.co.uk